

ID. NUMBER									
0	0	0	0	0	0	0	0	0	0
1	1	1	1	1	1	1	1	1	1
2	2	2	2	2	2	2	2	2	2
3	3	3	3	3	3	3	3	3	3
4	4	4	4	4	4	4	4	4	4
5	5	5	5	5	5	5	5	5	5
6	6	6	6	6	6	6	6	6	6
7	7	7	7	7	7	7	7	7	7
8	8	8	8	8	8	8	8	8	8
9	9	9	9	9	9	9	9	9	9

TEST FROM

جامعة دمشق
 A
 5
 10/10/2019



T	F			
1. A	B	<input checked="" type="radio"/>	D	E
2. <input checked="" type="radio"/>	B	C	D	E
3. A	<input checked="" type="radio"/>	C	D	E
4. A	B	C	<input checked="" type="radio"/>	E
5. A	B	C	D	<input checked="" type="radio"/>
6. A	B	C	<input checked="" type="radio"/>	E
7. <input checked="" type="radio"/>	B	C	D	E
8. <input checked="" type="radio"/>	B	C	D	E
9. A	B	<input checked="" type="radio"/>	D	E
10. <input checked="" type="radio"/>	B	C	D	E
11. <input checked="" type="radio"/>	B	C	D	E
12. <input checked="" type="radio"/>	B	C	D	E
13. <input checked="" type="radio"/>	B	C	D	E
14. <input checked="" type="radio"/>	B	C	D	E
15. <input checked="" type="radio"/>	B	C	D	E
16. A	<input checked="" type="radio"/>	C	D	E
17. A	<input checked="" type="radio"/>	C	D	E
18. <input checked="" type="radio"/>	B	C	D	E
19. A	B	C	<input checked="" type="radio"/>	E
20. A	B	C	<input checked="" type="radio"/>	E
21. A	B	C	<input checked="" type="radio"/>	E
22. A	B	<input checked="" type="radio"/>	D	E
23. A	<input checked="" type="radio"/>	C	D	E
24. <input checked="" type="radio"/>	B	C	D	E
25. A	B	C	<input checked="" type="radio"/>	E
26. <input checked="" type="radio"/>	B	C	D	E
27. A	B	<input checked="" type="radio"/>	D	E
28. A	<input checked="" type="radio"/>	C	D	E
29. A	<input checked="" type="radio"/>	C	D	E
30. A	B	<input checked="" type="radio"/>	D	E
31. A	B	<input checked="" type="radio"/>	D	E
32. A	B	C	<input checked="" type="radio"/>	E
33. A	B	<input checked="" type="radio"/>	D	E
34. <input checked="" type="radio"/>	B	C	D	E
35. <input checked="" type="radio"/>	B	C	D	E
36. A	<input checked="" type="radio"/>	C	D	E
37. <input checked="" type="radio"/>	B	C	D	E
38. <input checked="" type="radio"/>	B	C	D	E
39. A	<input checked="" type="radio"/>	C	D	E
40. <input checked="" type="radio"/>	B	C	D	E
41. <input checked="" type="radio"/>	B	C	D	E
42. <input checked="" type="radio"/>	B	C	D	E
43. A	B	C	<input checked="" type="radio"/>	E
44. A	B	C	<input checked="" type="radio"/>	E
45. A	<input checked="" type="radio"/>	C	D	E
46. <input checked="" type="radio"/>	B	C	D	E
47. <input checked="" type="radio"/>	B	C	D	E
48. <input checked="" type="radio"/>	B	C	D	E
49. A	B	C	<input checked="" type="radio"/>	E
50. <input checked="" type="radio"/>	B	C	D	E

T	F			
51. A	B	C	D	E
52. A	B	C	D	E
53. A	B	C	D	E
54. A	B	C	D	E
55. A	B	C	D	E
56. A	B	C	D	E
57. A	B	C	D	E
58. A	B	C	D	E
59. A	B	C	D	E
60. A	B	C	D	E
61. A	B	C	D	E
62. A	B	C	D	E
63. A	B	C	D	E
64. A	B	C	D	E
65. A	B	C	D	E
66. A	B	C	D	E
67. A	B	C	D	E
68. A	B	C	D	E
69. A	B	C	D	E
70. A	B	C	D	E
71. A	B	C	D	E
72. A	B	C	D	E
73. A	B	C	D	E
74. A	B	C	D	E
75. A	B	C	D	E
76. A	B	C	D	E
77. A	B	C	D	E
78. A	B	C	D	E
79. A	B	C	D	E
80. A	B	C	D	E
81. A	B	C	D	E
82. A	B	C	D	E
83. A	B	C	D	E
84. A	B	C	D	E
85. A	B	C	D	E
86. A	B	C	D	E
87. A	B	C	D	E
88. A	B	C	D	E
89. A	B	C	D	E
90. A	B	C	D	E
91. A	B	C	D	E
92. A	B	C	D	E
93. A	B	C	D	E
94. A	B	C	D	E
95. A	B	C	D	E
96. A	B	C	D	E
97. A	B	C	D	E
98. A	B	C	D	E
99. A	B	C	D	E
100. A	B	C	D	E

T	F			
101. A	B	C	D	E
102. A	B	C	D	E
103. A	B	C	D	E
104. A	B	C	D	E
105. A	B	C	D	E
106. A	B	C	D	E
107. A	B	C	D	E
108. A	B	C	D	E
109. A	B	C	D	E
110. A	B	C	D	E
111. A	B	C	D	E
112. A	B	C	D	E
113. A	B	C	D	E
114. A	B	C	D	E
115. A	B	C	D	E
116. A	B	C	D	E
117. A	B	C	D	E
118. A	B	C	D	E
119. A	B	C	D	E
120. A	B	C	D	E
121. A	B	C	D	E
122. A	B	C	D	E
123. A	B	C	D	E
124. A	B	C	D	E
125. A	B	C	D	E
126. A	B	C	D	E
127. A	B	C	D	E
128. A	B	C	D	E
129. A	B	C	D	E
130. A	B	C	D	E
131. A	B	C	D	E
132. A	B	C	D	E
133. A	B	C	D	E
134. A	B	C	D	E
135. A	B	C	D	E
136. A	B	C	D	E
137. A	B	C	D	E
138. A	B	C	D	E
139. A	B	C	D	E
140. A	B	C	D	E
141. A	B	C	D	E
142. A	B	C	D	E
143. A	B	C	D	E
144. A	B	C	D	E
145. A	B	C	D	E
146. A	B	C	D	E
147. A	B	C	D	E
148. A	B	C	D	E
149. A	B	C	D	E
150. A	B	C	D	E

T	F			
151. A	B	C	D	E
152. A	B	C	D	E
153. A	B	C	D	E
154. A	B	C	D	E
155. A	B	C	D	E
156. A	B	C	D	E
157. A	B	C	D	E
158. A	B	C	D	E
159. A	B	C	D	E
160. A	B	C	D	E
161. A	B	C	D	E
162. A	B	C	D	E
163. A	B	C	D	E
164. A	B	C	D	E
165. A	B	C	D	E
166. A	B	C	D	E
167. A	B	C	D	E
168. A	B	C	D	E
169. A	B	C	D	E
170. A	B	C	D	E
171. A	B	C	D	E
172. A	B	C	D	E
173. A	B	C	D	E
174. A	B	C	D	E
175. A	B	C	D	E
176. A	B	C	D	E
177. A	B	C	D	E
178. A	B	C	D	E
179. A	B	C	D	E
180. A	B	C	D	E
181. A	B	C	D	E
182. A	B	C	D	E
183. A	B	C	D	E
184. A	B	C	D	E
185. A	B	C	D	E
186. A	B	C	D	E
187. A	B	C	D	E
188. A	B	C	D	E
189. A	B	C	D	E
190. A	B	C	D	E
191. A	B	C	D	E
192. A	B	C	D	E
193. A	B	C	D	E
194. A	B	C	D	E
195. A	B	C	D	E
196. A	B	C	D	E
197. A	B	C	D	E
198. A	B	C	D	E
199. A	B	C	D	E
200. A	B	C	D	E

Chose the correct answer:

1- look at this picture, which is the name of the palace:

هذه الصورة القصر

- a) Hayr al- Garbi
- b) Hallabat
- c) Qaser al- Hair al-Sharqi
- d) Al-Ukaidetr



2- The important school was first found in

المدرسة الاولى في الفترة

- a) Abbasid period
- b) Seljuk period
- c) Mamluked period
- d) Ottoman period

3-There is one palace isn't belonging to the Umayyad period:

- a) Anjar palace
- b) Topqabi
- c) Hirbat al- minya
- d) Qasr al-Hayr al-Sharqi

4-This is the picture of the Ablution in the Madrassa of Sultan?

- a) Ahmad II
- b) Qalawon
- c) Qansoh al Gouri
- d) Hassan



5- This is the picture of the palace ?



- a) Qala
- b) Azem
- c) Harana
- d) Topqabi


6-Qaser al- Hayer al- Sharqi and Gharbi have an Evidence of a complex water infrastructure system

في قصر الحير الشرقي والغربي يوجد نظام متكامل للمياه

- a) Yes
- b) No
- c) No they have just a Bathhouses
- d) Yes, and they have Bathhouses also

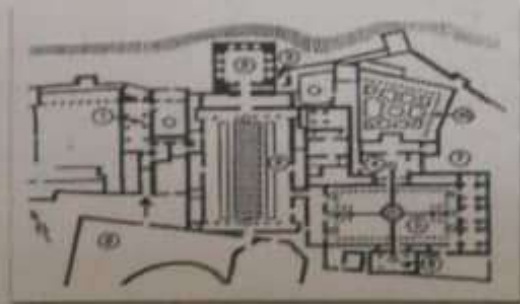
7-Write the name of this mosque? ما هو اسم الجامع في الشكل

- a) Cordoba mosque
- b) Ibn Tolon mosque
- c) Sammerra mosque
- d) Sidi Oqba mosque



8-Look at this picture, which palace is this palace:

- a) Al- Hamrah palace
- b) Al-Azem palace
- c) Al -Aqmar palace
- d) A- Zahrah palace



9- Look at this picture, where is the Lions courtyard:

انظر إلى نفس الرسم السابق أين تقع باحة الأسود

- a) 2
- b) 9
- c) 5
- d) 1

10- There is one palace is not belonging to the Abbasid period: قصر واحد غير عباسي:

- a) Khirbat al- minya
- b) Al- Balkurwra
- c) Al- Qala
- d) Jawsaq al-Khaqani

11- Bab al Futuh is a Gate : باب الفتوح هو باب يقع في:

- a) Gate in Cairo and Belong to Fatimed period
- b) Gate in Bagdad and belong to Fatimed period
- c) Gate in Amman and belong to Fatimed period
- d) In Damascus and belong to mamluked period

12- Topkapi palace is in Turkey & it locate in the city:

قصر مطوب قباي يقع في مدينة

- a) Istanbul
- b) Anqarw
- c) Ismir
- d) Bursa

13- look at this picture, which is the name of the palace:

هذه الصورة لقصر

- a) Topkapi palace
- b) Hallabat
- c) Qaser al- Hair al-Sharqi
- d) Al-Ukaidehr



14- Qaser al- Hair al-Sharqi was built during: بني قصر الحير الشرقي بتاريخ

- a) 8th century
- b) 7th century
- c) 6th century
- d) 9th century

15- Khalf Hisham ibn Abd al- Malik built these

palaces?: هشام بن عبد الملك بنى القصور التالية:

- a) Qaser al- Hayr al- Shaeqi, al Hallabat and Umayyad palace in Amman
- b) Qaser al- Hayr al- Garbi

c) Hallabat

d) Hallabat and Umayyad palace in Amman

16- Jawseq al-Khaqani palace was built by بني قصر الجوسق الخاقاني من قبل الخليفة

- a) Al- Mutawakel
- b) Al- Mutasem
- c) Al- Maamoun
- d) Al- Amain

17- the location of al- Balkuwara and Jawsaq al-Khaqani Palace is موقع قصر الباقورة والجوسق الخاقاني

- a) Bagdad
- b) Samarra
- c) Al Busra
- d) Al Musel

18- The Abbasids places could have قد القصور العباسية قد تتألف من

- a) 1,2&3 stories
- b) 2 floores
- c) 1 stories
- d) 3 stories

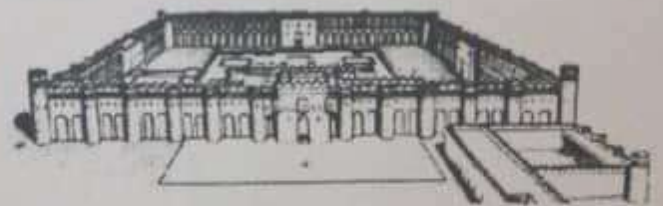
19- Aleppo Citadel was from 10 -15 cenyury build by بنيت قلعة حلب خلال القرن العاشر والخامس عشر من قبل

- a) Ayyubid
- b) Hamadan
- c) Mamluked
- d) Saljuks, Ayyubid, Hamadan& Mamluked

20- look at this picture, which is the name of the palace:

هذه الصورة لقصر

- a) Hayr al- Garbi
- b) Hallabat
- c) Azem
- d) Al-Ukaidehr



21- Ibin Tolon minaret is? منارة جامع ابن طولون

- a) Spiral and its outside of the wall of the mosque
- b) Spiral but it is inside
- c) Spiral but it is on the wall it self
- d) Spiral and it is on the second wall of the mosque

22- Cordoba mosque is a mosque related to جامع قرطبة هو جامع ينتمي للفترة

- a) Umayyad period-
- b) Abbasid period
- c) Late Umayyad period "second period"
- d) Fatimed period

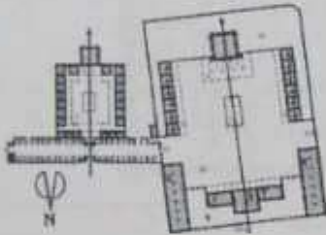
23- Dome of the Rock was built by: بنيت قبة الصخرة من قبل

- a) Caliph Walid ibn Abd al-Malik
- b) Caliph Abd al- Malk ibn Marwan
- c) Caliph Hisham
- d) Caliph Abd al- Rahman III

24-The shape plane of the Dome of the Rock is: شكل مسطحة الصخرة

- a) Octagon
- b) Square
- c) Pentagon
- d) Hexagon

25- Sulimanyya complex was built. مجمع السليمانية حسب الشكل بني خلال




- a) was built during the Ottoman period in Istanbul
- b) was built during the Ottoman period in Cairo
- c) was built during the Mamluk period in Istanbul
- d) was built during the Ottoman period in Damascus

26-Damascus citadel was built first during the: بنيت قلعة دمشق خلال

- a) Seljuked period
- b) Zanjid period
- c) Ayyoubid period
- d) Ayyoubid and Zanjid periods

27-Write the name of the palace: أشر إلى اسم القصر

- a) Qasr al-Hayr al-Sharqi
- b) Khirbat al- minya
- c) Amra
- d) Aman



28- During the Zanjid and Ayyoubid period, there were:

خلال الفترة الزنكية والأيوبية كان يوجد

- a) a lot of places
- b) few places
- c) No places
- d) a large number of palaces

29- Tikyya was a famous building during Ottoman period النكية هو بناء مهم ظهر في الفترة العثمانية

- a) Mosque & school
- b) Mosque, school, Kitchen & staying rooms
- c) Mosque
- d) School

30- Umayyad mosque was built by بني الجامع الأموي في عهد الخليفة

- a) Abd al- Malek Ibn Marwan
- b) Marwan Ibn al- Hakem
- c) Walid ibn Abd al- Malek
- d) Hisham ibn Abd al- Malek

31-Al Hamra palace-location: يقع قصر الحمراء

- a) Cordoba
- b) al-zahrah
- c) Granada
- d) Ishpilia

32-Cordoba mosque was built in 4 steps by? بني جامع قرطبة من قبل

- a) 'Abd al-Rahman I
- b) 'Abd al-Rahman II
- c) (IV) al-Mansur
- d) (I) 'Abd al-Rahman I; (II) 'Abd al-Rahman II; (III) al-Hakam II; (IV) al-Mansur

33-Islamic architecture is characterized by arches which kind of Arch they used in Morocco تميز استخدام العمارة الإسلامية للآقواس والعتود وقد استخدم في المغرب شكل القوس

- a) Pointed
- b) Semi circle
- c) Horseshoe arch
- d) round arch

34-One of the main characters of the minarets plans of the mosques during the Umayyad period? أخذ خصائص شكل مسطحة ماكن الجوامع في الفترة الأموية؟

- a) Square
- b) Circle
- c) Rectangle
- d) Hexagon

35- Write down about the main characters of the minarets, during the Ottoman period they look like? - المآذن في الفترة العثمانية كانت مثل؟

- a) Pencils
- b) Columns
- c) Mamluked minarets
- d) Abbasid minarets

- 36- The most famous Caravansaries (Khans) during the Islamic period in Damascus?
 أهم خانات دمشق؟
- Khan alamoud, al Sanouber and Ruz
 - Khan Assad Bacha and Suliman Bacha & Harir
 - Khan Al Khalili
 - Khan Barquq

- 37-Qirawan minaret was:
 منارة القيروان كانت:
- The first minaret in the west Arab county
 - One of the first minaret in the west Arab counties
 - The second minaret in the west Arab counties
 - A modern minaret in the west Arab counties

- 38- The palaces during the Abbasid period are:-
 القصور في الفترة العباسية تشبه:
- like cities
 - like towns
 - like villages
 - like normal palaces

- 39-Al-Qirawan mosque (698 AD) contain a total of:
 جامع القيروان يحتوي على عدد أعمدة:
- 414 columns
 - 400 columns
 - 314 columns
 - 300 columns

- 40- Madrassa & Mausoleum Complex of Sultan Hassan was constructed in:
 بنيت مدرسة ومجمع السلطان حسن في:
- in Cairo, Egypt 1356-63
 - in Damascus, Syria 1356-63
 - in Cairo, Egypt 1456-64
 - in Damascus, Syria 1456-64

- 41- Al - Rank it's a kind of Decoration was offend used during
 الرنك هو أحد عناصر الزخرفة الهامة التي استخدمت بكثرة خلال:
- Mamluked period
 - Otheman period
 - aiyyhid period
 - Saljoked period

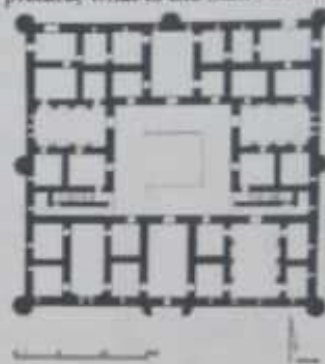
- 42-Al- ablag- it's a kind of Decoration was offend used during
 الأبلق نوع مميز تم التباعة في البداية من خلال تناوب العنامل بين الأبيض والأسود والأحمر:
- Mamluked and otheman
 - Mamluked
 - Omayad
 - Abasid

- 43-The element of the Islamic architecture are
 أهم عناصر الزخرفة الإسلامية هي التالية:
- Inscription
 - Geometric forms
 - Flora forms
 - Inscription, geometric forms, Flora forms

- 44-The influence of the Islamic architecture arrived to
 وصل تأثير الحضارة الإسلامية إلى العالم وأولا إلى:
- Italy and France
 - Andalusia
 - India, China and Italy
 - D-Italy, Andalusia, India and China

- 45-Bagdad was built by al Mansour its plan is
 بنيت مدينة بغداد من قبل الخليفة المنصور وقد كان شكل منسقط المدينة:
- square
 - circle
 - octagon
 - hexagon

- 46- Look at this picture, what is the name of this palace



- Qasr al-Kharran
- Khirbat al-Minya
- Anjer
- Azem

- 47-One of the main mosques in Cairo and also important
 أحد أهم جوامع القاهرة وكان يعتبر جامعة ومآزالس one of the oldest universities.
- Al Azhaer
 - Ibn tolon
 - Omar ibn al ass
 - Salah al din

- 48-The construction system of Othman mosque
 يعتمد نظام بناء الجوامع في الفترة العثمانية على النظام:
- square System
 - circle System
 - Octagon System
 - hexagon System

- 49-Umayyad prayer hall mosque in Damascus consists of?
 تتألف قاعة الصلاة في الجامع الأموي بدمشق من:
- 6 galleries\ aisles
 - 4 galleries\ aisles
 - 5 galleries\ aisles
 - 3 galleries\ aisles

- 50-The first mosque in Egypt is
 أول مسجد في مصر:
- Omar ibn Alassa
 - Al Azher
 - Ibn Tolon
 - Al Aqmqr

کتابخانه علامه اسلامیہ

دم عبدعزیز بن عبدالمطلب
جامعة دمشق

B

لصاحب السمو



ن

کتابخانه

ID NUMBER									

TEST FROM

T	F	C	D	E
1				
2				
3				
4				
5				
6				
7				
8				
9				
10				
11				
12				
13				
14				
15				
16				
17				
18				
19				
20				
21				
22				
23				
24				
25				
26				
27				
28				
29				
30				
31				
32				
33				
34				
35				
36				
37				
38				
39				
40				
41				
42				
43				
44				
45				
46				
47				
48				
49				
50				

T	F	C	D	E
51				
52				
53				
54				
55				
56				
57				
58				
59				
60				
61				
62				
63				
64				
65				
66				
67				
68				
69				
70				
71				
72				
73				
74				
75				
76				
77				
78				
79				
80				
81				
82				
83				
84				
85				
86				
87				
88				
89				
90				
91				
92				
93				
94				
95				
96				
97				
98				
99				
100				

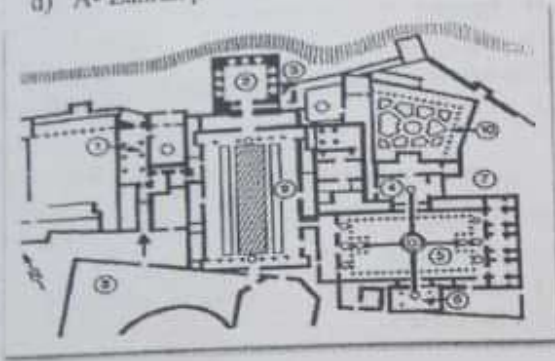
T	F	C	D	E
101				
102				
103				
104				
105				
106				
107				
108				
109				
110				
111				
112				
113				
114				
115				
116				
117				
118				
119				
120				
121				
122				
123				
124				
125				
126				
127				
128				
129				
130				
131				
132				
133				
134				
135				
136				
137				
138				
139				
140				
141				
142				
143				
144				
145				
146				
147				
148				
149				
150				

T	F	C	D	E
151				
152				
153				
154				
155				
156				
157				
158				
159				
160				
161				
162				
163				
164				
165				
166				
167				
168				
169				
170				
171				
172				
173				
174				
175				
176				
177				
178				
179				
180				
181				
182				
183				
184				
185				
186				
187				
188				
189				
190				
191				
192				
193				
194				
195				
196				
197				
198				
199				
200				

Chose the correct answer:

1- Look at this picture, which palace is this one: انظر الى الرسم ما هو اسم القصر

- a) Al- Hamrah palace
- b) Al- Azem palace
- c) Al -Aqmar palace
- d) A- Zahrah palace



2- Look at this picture, where is the Lions courtyard: انظر الى نفس الرسم السابق أين تقع باحة الأسود

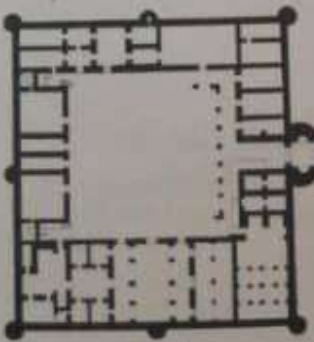
- a) 2
- b) 9
- c) 5
- d) 1

3- The main characters of the palaces during the Umayyad period is: أحد خصائص القصور في الفترة الأموية

- a) Bathhouse, residential areas & irrigation system & mosque
- b) Bathhouse, residential areas & mosque
- c) Bathhouse, residential areas
- d) Bathhouse, & irrigation system

4- Which Building is in the picture: ما اسم المبنى حسب الشكل

- a) Qasr al-Kharran
- b) khirbat al minya palace
- c) Umayyad palace
- d) Azem Palace



5- Qaser al- Hair al- Sharqi was built by: بني قصر الحير الشرقي من قبل الخليفة

- a) Caliph Walid ibn Abd al-Malik
- b) Caliph Abd al- Malk ibn Marwan
- c) Caliph Hisham
- d) Caliph Abd al- Rahman III

6- Khalf Hisham ibn Abd al- Malik built these palaces: بني الخليفة هشام بن عبد الملك القصور التالية

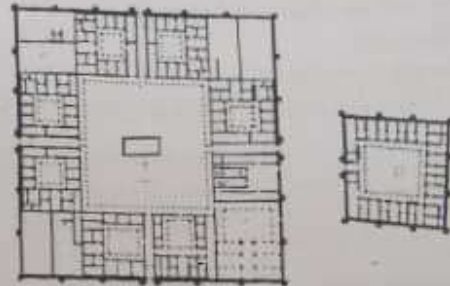
- a) Qaser al- Hayr al- Sharqi, al Hallabat and Umayyad palace in Amman
- b) Qaser al- Hayr al- Sharqi
- c) Hallabat
- d) Hallabat and Umayyad palace in Amman

7- The location of al- Balkuwara and Jawsaq al- Khaqani Place is: تقع قصور البقورة والجوسق الخاقني في

- a) Bagdad
- b) Samarra
- c) Al Busra
- d) Al Musel

8- look at this picture, which is the name of the palace: هذه الصورة لقصر

- a) Hallabat
- b) Hayr al- Garbi
- c) Qaser al- Hair al- Sharqi
- d) Al-Ukaidehr



9- The Abbasids palaces could have: تتألف القصور في الفترة العباسية من

- a) 1,2&3 stories
- b) 2 floors
- c) 1 stories
- d) 3 stories

10- a plan of typical, early Islamic Mosque consist of: مسقط جامع في بداية الإسلام يتألف من

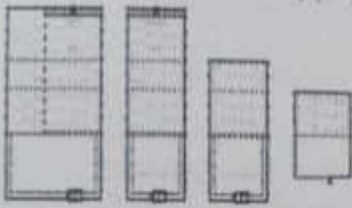
- a) Qibla wall, Mihrab niche, Hypostyle hall, court yard and Sahn
- b) Qibla wall, Mihrab niche, Hypostyle hall
- c) Hypostyle hall, court yard or Sahn
- d) Hypostyle hall

11- Topkapi palace locate in the city يقع قصر طوب قابي في مدينة

- a) In Istanbul
- b) In Ankara
- c) In Izmir
- d) In Bursa

12-Cordoba mosque was built in 4 steps by? بني جامع قرطبة

- a) 'Abd al-Rahman I
- b) 'Abd al-Rahman II
- c) (IV) al-Mansur
- d) (I) 'Abd al-Rahman I; (II) 'Abd al-Rahman II; (III) al-Hakam II; (IV) al-Mansur



13- Dome of the Rock is a building related to the Umayyad period & was built by بنيت قبة الصخرة من قبل

- a) Caliph Walid ibn Abd al-Malik
- b) Caliph Hisham
- c) Caliph Abd al- Malik ibn Marwan
- d) Caliph Abd al- Rahman III

14- Jawseq al-Khaqani Palace was built by قصر الجوسق الخاقاني بني من قبل الخليفة

- a) Al- Mu tasem B-Al- Mutawakkel
- b) Caliph Abd al- Malk ibn Marwan
- c) Al- Maamoun
- d) Al- Amain

15-Bimarstn al-Nouri is: يعتبر اليمارستان النوري:

- a) Hospital
- b) Small Hospital
- c) Klink
- d) School

16-One of the main mosques in Cairo and also important as one of the oldest universities. أهم الجوامع في القاهرة وهو أيضا جامعة

- a) Al Azhaer
- b) Ibn Toulon
- c) Omar ibn al ass
- d) Salah al din

17- Tikyya was a famous building during Ottoman period and consist of: التكية هو بناء مهم ظهر في الفترة العثمانية ويتألف من

- a) Mosque & school
- b) Mosque, school, Kitchen & staying rooms
- c) Mosque
- d) school

18- Umayyad mosque was built by بني الجامع الأموي في عهد الخليفة

- a) by Abd al- Malek Ibn Marwan
- b) Marwan Ibn al- Hakem
- c) al Walid ibn Abd al- Malek
- d) Hisham ibn Abd al- Malek

19- Al-Azhar mosque in Cairo الجامع الأزهر في القاهرة ينتمي للفترة

- a) Fatimed and Mamluked
- b) Mamluked
- c) fatimed
- d) Umayyad

20- This Minaret is the minaret of the Mosque هذه المنارة هي لجامع:

- a) Al Azhaer
- b) Ibn Toulon
- c) Omar ibn al ass
- d) Sammeera



21-Bagdad was built by al Mansuer and its plan is like? بنيت مدينة بغداد من قبل الخليفة المنصور وقد كان شكل مسقط المدينة:

- a) Square
- b) Circle
- c) Octagon
- d) Hexagon

22-Cordoba mosque,Arches شكل الأقواس في جامع قرطبة

- a) pointed
- b) Semi circle
- a) hose arch shoe
- b) hose arch shoe and double stories

23-On of the main characters of the minarets plans of the mosques during the Umayyad period? أحد خصائص المآذن الجوامع في الفترة الأموية؟

- a) square
- b) circle
- c) octagon
- d) hexagon

24- Write down about the main characters of the minarets, the Ottoman period like? المآذن الفترة العثمانية؟

- a) pencils
- b) Umayyad minarets
- c) Mamluked minarets
- d) Abbasid minarets

25-The influence of the Islamic architecture arrived to وصل تأثير الحضارة الإسلامية إلى

- a) Italy and France
- b) Andalusia
- c) India , China and Italy
- d) Italy, Andalusia, India ,China and France

26- look at this picture, which is the name of the palace: هذه الصورة لقصر:

- a) Hayr al- Garbi
- b) Hallabat
- c) Azem
- d) Al-Ukaidehr



27- The palaces during the Abbasid period are:- القصور في الفترة العباسية تشبه

- a) like cities
- b) like towns
- c) like villages
- d) like normal palaces

28- Al - Rank it's a kind of Decoration was offend used during الرنك هو أحد عناصر الزخرفة الهامة التي استُخدمت بكثرة خلال

- a) Mamluked period
- b) Ottoman period
- c) Ayoubid period
- d) Seljuked period

29- Al- ablag- it's a kind of Decoration was offend used during الأبلق نوع مميز تم اتباعه في الفترة

- a) Mamluked and Ottoman
- b) Mamluked
- c) Omayad
- d) Abasid

30- The element of the Islamic architecture are أهم عناصر الزخرفة الإسلامية هي التالية

- a) Inscription
- b) Geometric forms
- c) Flora
- d) Inscription, geometric forms and Flora

31- This is the picture of the palace ? هذه صورة من قصر



- a) Qala
- b) Azem
- c) Harana
- d) Topqabi

32- Damascus citadel was build first during بنيت قلعة دمشق خلال

- a) seljuked and Ayoubid period
- b) Zanqid period
- c) Ayoubid period
- d) Ayoubid and Mamluk

33- The construction system of Othman mosque depend يعتمد بناء الجوامع في الفترة العثمانية على النظام

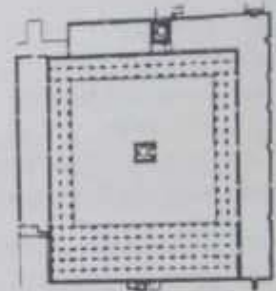
- a) square
- b) circle
- c) octagon
- d) hexagon

34- The important of Omayyad mosque is تعود أهمية الجامع الأموي إلى أنه

- a) First mosque during Umayyad period
- b) The largest mosque
- c) The most beautiful decorations
- d) Its design was an example for all mosques in the Islamic world

35- what is the name of this mosque? ما اسم الجامع؟

- a) Al Azhaer
- b) Ibn Toulon
- c) Omar ibn al ass
- d) Salah al din



36- Ibin Tolon minaret is? منارة جامع ابن طولون

- a) Spiral and its outside of the wall of the mosque
- b) Spiral but it is inside
- c) Spiral but it is on the wall it self
- d) Spiral and it is on the second wall of the mosque

37- Aleppo Citadel was built from 10 - 15 century by: بنيت قلعة حلب بين القرن 10 و 15 من قبل

- a) Ayoubid
- b) Hamadanid
- c) Mamluk
- d) Saljuked, Ayoubid, Hamadanid & Mamluk

38- Write the name of this mosque? ما هو اسم الجامع الشكل

- a) Al Azher mosque
- b) Ibn Tolon mosque
- c) Sannerra mosque
- d) Sidi Oqba mosque



39- Anjer palace and Khirbat al-Minya & al-Kharran palaces were built by: بنيت قصور عنجر وخربة المينة والحاران من قبل

- a) Caliph Walid ibn Abd al-Malik
- b) Caliph Abd al- Malk ibn Marwan
- c) Caliph Hisham
- d) Caliph Abd al- Rahman III